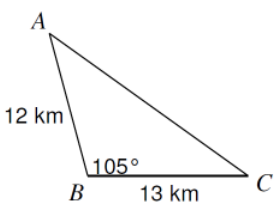
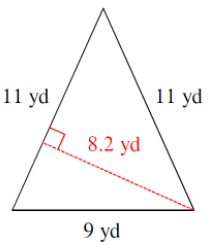
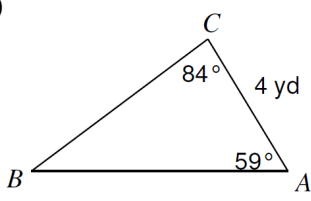
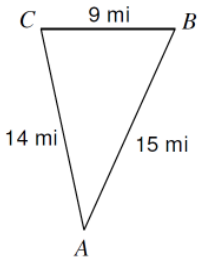
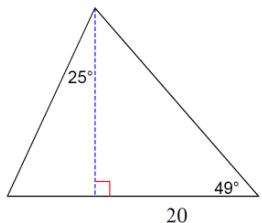
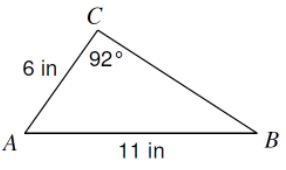
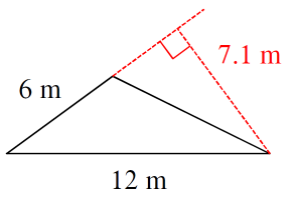
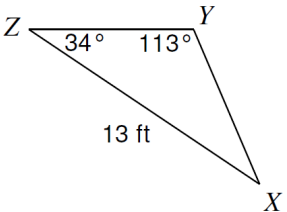
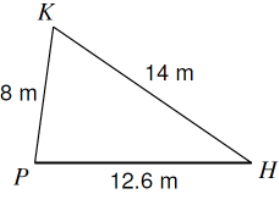
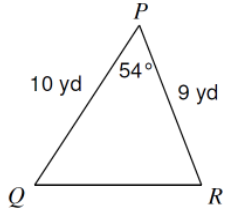
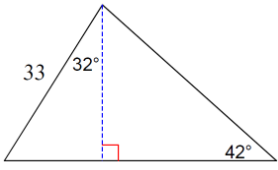
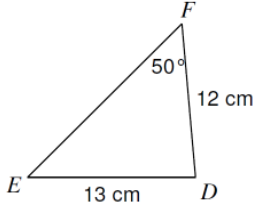
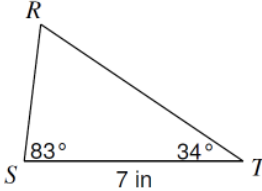
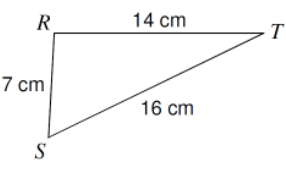
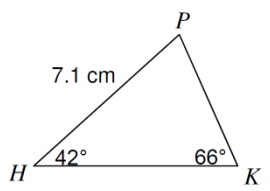


Directions: Find the area of each given triangle. Round to tenth place. Must show work!

<p>1.)</p> 	<p>2.)</p> 	<p>3.)</p> 	<p>4.)</p> 
<p>5.)</p> 	<p>6.)</p> 	<p>7.)</p> 	<p>8.)</p> 
<p>9.)</p> 	<p>10.)</p> 	<p>11.)</p> 	<p>12.)</p> 
<p>13.)</p> 	<p>14.)</p> 	<p>15.)</p> 	<p>16.)</p> 